

**Newcastle University**

**MATHEMATICS REVISION BOOKLET**

– helping you to succeed in Higher Education –

2<sup>nd</sup> Edition, (c) 2002, with Covid-19 update August 2020

School of Mathematics, Statistics & Physics,  
Faculty of Science, Agriculture and Engineering, Newcastle University.  
<http://www.ncl.ac.uk/engineering>

## **Introduction**

### What is this booklet for?

This booklet is to help you prepare for your degree programme at University. It includes material on a number of mathematical topics that you have probably met at school or college, and which we shall be using frequently in the modules you will be covering. If you can use these techniques easily and reliably, you will be better able to understand the new topics you meet, and to achieve success in your degree.

If you are not fluent in these techniques, or if there are any you have not met at all, then it is important that you try to prepare yourself before arrival at University. This booklet is designed to help you do so. We hope you find it useful, and that you arrive in Newcastle ready to tackle a challenging and interesting degree with excellent employment prospects!

### Covid-19 update – Autumn 2020

Students starting at Newcastle University in Autumn 2020 will know that the Coronavirus pandemic has led us to change our schedule and teaching approach, and you'll be fully informed about that, but we'll be doing our very best to give you a good educational, cultural and social experience.

As part of our revised offering, you'll be starting formal teaching in mid-October, following a three-week induction period. During this period, you should be preparing yourself for study, so you can get a flying start when more formal teaching begins. The material in this booklet, and in the ENG1001 and SFY0018 courses you'll be accessing through the Canvas system, is part of those two modules. We'll be assuming that you've covered it before we meet you in October. You are expected to take responsibility to study this, and to ensure you are fairly fluent in the basic mathematical skills and knowledge you'll need (though of course you can continue to work on this later).

Also note that those who attended the Partners Summer School in July will have seen some of this material before, but it's well-worth revisiting it with the aim of reaching complete confidence and fluency!

### Note for students entering Foundation Year (and any others without A-level maths)

This booklet, and on-line equivalent, is designed to be suitable for those entering with a variety of background qualifications in mathematics. If you have *not* done A-level, then some of the topics covered in this booklet will be taught in your first year at Newcastle, so don't worry if you haven't seen them before (especially section 8 on calculus). However, the earlier sections, especially 1, 2, 4 and 5, are extremely important and you should try to complete as much as possible of these parts at least.

### How should I use it?

Here are some suggestions about how to use the booklet to best effect:

1. Do your working in the boxes below each question. If you run out of space, use extra paper (this is *not* going to be marked!).
2. Do not use your calculator. The arithmetic is straightforward, and we think you should be able to do it, except for some cases where the answer is left in e.g. the form  $\sqrt{13}$ .
3. Try at least a few exercises from *every* section, even if you are already confident. This will help you to 'brush up' on material that you have not used for a while.

4. Questions marked \* have no answers given. We have given answers to most exercises, but not all. These are there to test your confidence, so check your working carefully for each of them!
5. If you are not really confident on any section, then you should attempt *all* the exercises, and perhaps try to find a textbook (or past notes) to help you reinforce these topics. If you get stuck on any section, try a later one – don't stop there!

### Is it assessed?

This material should mostly have been in your previous GSCE, A-level or other qualifications. We will not assess your knowledge of it directly, unless it *is* taught in your normal modules, but much of it will be used as part of your courses.

### **Acknowledgements**

This booklet was written by Dr John Appleby of the Engineering Mathematics group in the School of Mathematics, Statistics & Physics, with contributions from other staff.

### **Contents**

Introduction .....	ii
Acknowledgements .....	ii
Contents .....	iii
1. Numbers etc.....	1
2. Fractions, Indices and Logarithms.....	3
3. Units and dimensions.....	7
4. Brackets, factors, simplification.....	9
5. Formulae and equations .....	12
6. Trigonometry etc. ....	16
7. Graphs.....	19
8. Differentiation and simple integration.....	21
Answers to Exercises.....	23

**1. Numbers etc.**

**1.1** Round each of the following to the number of decimal places given afterwards in brackets:

- a) 3.1415924 (3)      b) 3.1415924 (4)      c) 1.4142 (2)      d) 0.003299 (3)  
 e) 100.0423 (1)      \*f) 0.00409 (2)      g) -34.567 (1)      \*h) 0.5499 (1)

**1.2** Round each of the following to the number of significant figures given afterwards in brackets:

- a) 0.003299 (2)      b) 100.0463 (5)      c) 100.0463 (4)      d) 1473.3 (2)  
 e) 14.548 (3)      \*f) -0.5557 (2)      g) 0.0000034 (5)      \*h) 17001.3 (1)

**1.3** Put each number into scientific (standard) notation, e.g.  $3.45 \times 10^{-3}$ . Also, put into a form using only powers of 10 that are multiples of 3, i.e.  $10^3$ ,  $10^6$ ,  $10^{-3}$ ,  $10^0$ , etc.

- a) 34.56      b) 1089.4      c) 0.3027      d) 0.000552  
 e) -5.63      \*f) -1001.1001      g) 0.0000004      \*h) -99000.0

**1.4** Convert each number to ordinary decimal notation, e.g. 0.000403 :

- a)  $3.5 \times 10^{-3}$       b)  $-2.071 \times 10^5$       c)  $9.930 \times 10^{-1}$       d)  $0.207 \times 10^{-2}$   
 e)  $4.2156 \times 10^4$       \*f)  $3.14159 \times 10^2$       g)  $1.00 \times 10^6$       \*h)  $-4 \times 10^{-7}$

**1.5** Put a < or > sign between each pair of numbers to show which is greater and which is less:

- a) 9901    10032    b)  $-3$      $-7$     c) 4     $-17$     d)  $-99.43$     0.02  
 e) 0     $-0.341$     \*f)  $10^2$      $10^5$     g)  $10^{-2}$      $10^{-3}$     \*h)  $-4 \times 10^3$      $3 \times 10^4$

**1.6** In each case, multiply the number by 100, also divide it by 1000:

- a) 3.1416    b)  $-453.001$     c) 207.1    d)  $-0.00302$   
 e)  $3 \times 10^4$     \*f)  $7.5 \times 10^2$     g)  $-3.2 \times 10^{-3}$     \*h)  $27.4 \times 10^{-2}$

**1.7** Write each decimal as a fraction, and each fraction as a decimal:

- a) 0.2    b) 0.125    c)  $-0.75$     d) 0.375  
 e)  $1/4$     \*f)  $-7/5$     g)  $3/40$     \*h)  $1/12$

**1.8** Find the Highest Common Factor and Lowest Common Multiple of each pair or triple of numbers (e.g. 8 and 12 have HCF of 4 and LCM of 24):

- a) 4 8    b) 6 9    c) 4 15    d) 6 8  
 e) 10 15    \*f) 12 15    g) 5 12    \*h) 30 40 55

**1.9** Calculate each of the following:

- a)  $(-3) \times (4)$ , b)  $(-5) \times (-7)$ , c)  $-(-5) \times (-4)$ , d)  $(-1.5) \times (-4)$ , e)  $7 - 3 \times 4$ , \*f)  $-5 - 4 \times 2$   
 g)  $4 - \frac{3}{5} - \frac{1}{5}$ , \*h)  $15 \div 6 \div 2$  (what result would your calculator give for this – think before trying it!)

**2. Fractions, Indices and Logarithms**

**2.1** Cancel each fraction to leave it in its simplest form (e.g.  $\frac{18}{12}$  becomes  $\frac{3}{2}$ ):

- a)  $\frac{6}{4}$ , b)  $\frac{30}{18}$ , c)  $-\frac{12}{9}$ , d)  $\frac{36}{28}$

**2.2** Simplify each expression, leaving the result as a single improper fraction (e.g.  $\frac{11}{8}$  not  $1\frac{3}{8}$ ):

- a)  $\frac{1}{2} + \frac{1}{3}$                       b)  $\frac{2}{3} + \frac{5}{6}$                       c)  $\frac{3}{4} - \frac{5}{6}$                       \*d)  $\frac{1}{3} + \frac{3}{4} - \frac{1}{5}$

**2.3** Multiply or divide fractions, simplifying the result in each case:

a)  $\frac{2}{3} \times \frac{1}{4}$

b)  $\frac{3}{7} \times \frac{49}{6}$

\*c)  $-\frac{3}{4} \times \frac{6}{5}$

d)  $(-\frac{9}{5}) \times (-\frac{15}{8})$

e)  $\frac{2}{3} \div \frac{1}{6}$

f)  $\frac{3}{4} \div \frac{2}{3}$

g)  $-\frac{1}{5} \div \frac{3}{5}$

\*h)  $\frac{5}{12} \div \frac{10}{9}$

**2.4** Put over the lowest common denominator, and simplify the result, in each case (e.g.

$\frac{1}{x} - \frac{3}{x^2} = \frac{x-3}{x^2}$ ):

a)  $\frac{3}{x-1} + \frac{2}{x+2}$ , b)  $\frac{4}{y+3} - \frac{3}{y-3}$ , c)  $\frac{1}{2x+3} + \frac{4}{x-2}$ , d)  $\frac{a}{y} - \frac{a+2}{2y-1}$  e)  $\frac{3}{u} - \frac{2}{u+1} + \frac{4}{u-2}$ ,

f)  $\frac{1}{2}z + \frac{3}{z} - \frac{2}{z^2}$ , g)  $1 + \frac{2x-3}{x^2+1} - \frac{3}{4x}$ , \*h)  $2x-1 + \frac{3}{2(x-2)} - \frac{1}{2(x+3)}$  i)  $\frac{2}{x(x-1)^2} - \frac{3}{x^2(x-1)}$

**2.5** Simplify each expression:

a)  $\left(\frac{x}{2}\right)\left(\frac{3x^2}{4}\right)$ , b)  $\left(\frac{x^2}{6}\right)\left(\frac{9}{x}\right)$ , c)  $\left(\frac{2x^2y}{5z}\right)\left(\frac{3yz^2}{4x^4}\right)$ , d)  $\left(\frac{1}{x^2}\right) \div \left(\frac{2}{x}\right)$ , e)  $\left(\frac{a}{a+1}\right) \div \left(\frac{3a^2}{a^2+1}\right)$   
, \*f)  $\left(\frac{x}{2yz}\right) \div \left(\frac{x^2}{y(z+1)}\right)$ , g)  $\left(\frac{3b}{b+1}\right) \div \left(\frac{2b}{b^2-1}\right)$ , \*h)  $\left(\frac{3x+6}{2y^3}\right) \div \left(\frac{6x}{3yz}\right)$

**2.6** Give the value of each of the following:

a)  $2^{-3}$ , b)  $13^0$ , \*c)  $4^{-1}$ , d)  $(\frac{1}{2})^{-2}$ , e)  $8^{-\frac{1}{3}}$ , f)  $-16^{\frac{1}{4}}$ , g)  $27^{-\frac{2}{3}}$ , \*h)  $32^{\frac{3}{5}}$



**2.7** Simplify each of the following (e.g.  $10^2 \times 10^3 = 10^5$ ):

a)  $10^3 \times 10^4$

b)  $2^5 \times 2^{-3}$

c)  $x^{0.5} x^{1.5}$

d)  $x^5 / x^2$

e)  $5^7 \div 5^3$

f)  $y^{-\frac{1}{2}} y^{-\frac{5}{2}}$

g)  $(2x)^3$

h)  $(4x^2)^{\frac{1}{2}}$

i)  $(x^2)^3$

\*j)  $(3y^{\frac{3}{2}})^2$

k)  $(z^{-1})^3$

\*l)  $(x^{-1})^{-1}$

m)  $(9x^{-2})^{\frac{1}{2}}$

\*n)  $(10^{-3.5})^0$

o)  $(\frac{1}{2}w^3)^{-1}$

\*p)  $(3u^2)^{-1}(2u^{-3})^4$

**2.8** Give the value of each:

a)  $\log_{10}(100)$

b)  $\log_{10}(1000000)$

c)  $\log_{10}(0.1)$

d)  $\log_{10}(\frac{1}{1000})$

e)  $\log_2(8)$

\*f)  $\log_2(\frac{1}{16})$

g)  $\log_e(e^{-3})$

\*h)  $\log_e(\frac{1}{e})$

**2.9** Give the result as the logarithm of a single number, or as a value where possible:

- a)  $\log 3 + \log 4$       b)  $\log 16 - \log 2$       c)  $3 \log 2 - 2 \log 4$       d)  $-\log \frac{1}{2}$   
 e)  $10^{\log_{10} 5}$       \*f)  $-2e^{\ln 2}$       g)  $\log_e 1$       \*h)  $e^{-\ln x}$

**3. Units and dimensions**

*Standard prefixes:*  $m$  = milli =  $10^{-3}$ ,  $k$  = kilo =  $10^3$ ,  $M$  = mega =  $10^6$ ,  $\mu$  = micro =  $10^{-6}$ , (also  $c$  = centi =  $10^{-2}$ ).

*SI Units:*  $m$  = metres,  $s$  = seconds,  $N$  = newtons,  $kg$  = kilogrammes,  $V$  = volts,  $F$  = farads,  $C$  = coulombs,  $J$  = joules, (also  $l$  = litres).

For this exercise, use  $g \approx 10ms^{-2}$  (more accurate value:  $9.81ms^{-2}$ ).

**3.1** How many ..... ? (e.g. How many  $mm$  in one  $m$ ? Answer:  $10^3$ )

- a)  $cm$  in one  $m$     b)  $ml$  in  $2.5l$     c)  $s$  in  $1hr\ 30mins$     d)  $mV$  in  $2kV$   
 e)  $m^2$  in  $5km^2$     \*f)  $\mu F$  in  $2.3F$     g)  $\mu m$  in  $50.3mm$     \*h) degrees in 2.5 revolutions

**3.2** Convert to the units given:

a)  $5m^2$  to  $mm^2$ , b)  $3ms^{-1}$  to  $km/hr$ , c)  $5Nmm^{-2}$  to  $Nm^{-2}$ , \*d)  $g.mm^{-2}$  to  $kg.m^{-2}$

**3.3** Give the value in each case (with units):

a)  $3.6m / 3mm$ , b)  $10m^2 / 2.5m$ , c)  $4ms^{-1} \times 5mins$ , \*d)  $\rho gh$ , where  $\rho = 3kg.m^{-3}$ ,  $h = 2m$

**3.4** A (straight-line) graph of pressure (y axis) against  $1/Volume$  ( $x$ ) goes through the points  $(1/V = 5m^{-3}, p = 2000 Nm^{-2})$ ,  $(1/V = 15m^{-3}, p = 4000 Nm^{-2})$ . Find the gradient (with units).

**3.5** If the area of a rectangle is  $3.6m^2$ , and one side has length  $180mm$ , what is the length of the other side in  $m$ ?

**3.6** The Reynold's number  $Re$  for a fluid flow is given by  $Re = \frac{\rho UL}{\mu}$  (the quantities are density, velocity, length and viscosity).

If  $\rho = 1000 \text{kg.m}^{-3}$ ,  $U = 3.5 \text{m.s}^{-1}$ ,  $L = 0.2 \text{m}$ ,  $\mu = 0.01 \text{kg.m}^{-1}.\text{s}^{-1}$ , calculate  $Re$  and its units.

**\*3.7** Water has density  $1 \text{g} / \text{cm}^3$ . If steel has density 7.8 times that of water, what is the density of steel in tonnes per cubic metre ( $1 \text{t} = 1000 \text{kg}$ )?

**4. Brackets, factors, simplification**

**4.1** Expand and collect terms:

- a)  $2x(3 - 4x)$ , b)  $u - 1 + 2(3 - u)$ , c)  $2y + 4(y - 2)$ , d)  $z(z + 2) - (z - 2)$ ,  
 e)  $3u(u + 2) - 2u(4 - u)$ , \*f)  $5x(2x - 3) - 1 + 2x - x(4 - 3x)$

**4.2** Expand and collect terms:

a)  $(x+1)(x+4)$ , b)  $(u-3)(u+4)$ , c)  $(y+3)(y-3)$ , \*d)  $(2z-1)(2z+1)$ ,

e)  $(x+2)(x+y-3)$ , f)  $(2x-y+3)(3x+2y-2)$ , g)  $(x+y)^2 - (x-y)^2$ ,

h)  $(a+b)^3$ , \*i)  $(x+1)(x^2-x+1)$ , j)  $\left(x+\frac{1}{x}\right)^2$ , k)  $\left(\frac{1}{x}-\frac{2}{x^2}\right)^2$

**4.3** Factorise as far as possible in each case (e.g.  $18x^2y+8xy^2=2xy(9x+4y)$ ):

a)  $6x+3xy$ , b)  $8u^2-6uv$ , c)  $\frac{1}{2}x^3-\frac{1}{4}x^2$ , \*d)  $4ab^2c-9ac^3$ , e)  $3x^2-12xyz+15xz^2$ ,

f)  $\frac{u}{4v^2}-\frac{u^2}{6v}$ , g)  $\sqrt{x}+x$ , h)  $4\sqrt{1-2x}-6(1-2x)$

**4.4** Factorise into two brackets:

- a)  $x^2 + 3x + 2$ , b)  $y^2 - 4y + 3$ , c)  $v^2 - 2v - 15$ , \*d)  $z^2 + z - 20$ , e)  $2x^2 + 3x + 1$ ,  
 \*f)  $2u^2 + u - 3$ , g)  $6z^2 - 13z + 6$ , h)  $x^2 + 6x + 9$ , i)  $a^2 - b^2$ , j)  $4x^2 - 9y^2$ , k)  $x^2 - 3$ ,  
 l)  $u^2 - 4u + 4$

**4.5** Factorise into three brackets, where one is given:

- a)  $x^3 - 3x^2 + 3x - 1 = (x - 1)(\dots\dots)$ , b)  $y^3 - 5y^2 + 2y + 8 = (y + 1)(\dots\dots)$

**4.6** Given  $f(x)$  in each case, write down and simplify  $f(2x - 1)$  and  $f(1/y)$ :

- a)  $f(x) = x^2 - 3x$ , b)  $f(x) = 1 - 2x + 3x^2$ , c)  $f(x) = \frac{x}{2} + \frac{2}{x}$ , \*d)  $f(x) = (1 - x^2)^2$

**4.7** Write each of the following in the form  $(x+a)^2 + b$ ,

(e.g.  $x^2 + 2x + 2 = [(x+1)^2 - 1] + 2 = (x+1)^2 + 1$ ) – ‘completing the square’.

a)  $x^2 + 4x + 5$ , b)  $x^2 - 6x + 8$ , c)  $x^2 + 3x + 3$ , d)  $x^2 - x + 1$ , \*e)  $5 - 7x + x^2$

## 5. Formulae and equations

**5.1** Solve each equation:

a)  $2x - 3 = 4 - 3x$ , b)  $4y + 1 = \frac{1}{2}y - \frac{3}{2}$ , c)  $\frac{3-z}{2} = \frac{1-3z}{4}$ , d)  $\frac{1}{u} = \frac{3}{u-1}$ ,

e)  $\frac{2x-1}{3x+1} = \frac{4-2x}{1-3x}$ , \*f)  $\frac{z+1}{z-3} = \frac{4-z}{2-z}$

**5.2** Transpose each formula to make the bracketed variable the subject:

a)  $x = 3t - 2$  ( $t$ ), b)  $y = \frac{3}{2-x}$  ( $x$ ), c)  $T = 2\pi\sqrt{\frac{L}{g}}$  ( $L$ ), d)  $u = \frac{3v-2}{2v+1}$  ( $v$ ),

e)  $Q = \frac{\pi a^4 p}{8\mu L}$  ( $p$ ), f)  $\frac{1}{R} = \frac{1}{R_1} + \frac{1}{R_2}$  ( $R$ ), \*g)  $pV^\gamma = C$  ( $\gamma$ )

**5.3** Solve each quadratic equation *by factorising*:

a)  $x^2 - 3x + 2 = 0$ , b)  $y^2 - y - 12 = 0$ , \*c)  $z^2 + 2z - 24 = 0$ , d)  $2u^2 - u - 1 = 0$ ,  
e)  $v - 3v^2 + 2 = 0$ , f)  $4w^2 + 3w - 10 = 0$ , g)  $x^2 = 4x$ , \*h)  $-3y = -5y^2$



**5.4** Solve each quadratic equation *by completing the square* (see Exercise 4.7):

- a)  $x^2 + 4x + 3 = 0$ , b)  $y^2 - 2y = 0$ , c)  $z^2 + z - 2 = 0$ , d)  $3 - 4u + u^2 = 0$ ,  
e)  $1 - v^2 - 4v = 0$ , f)  $2w^2 + 2w - 1 = 0$ , g)  $ax^2 + bx + c = 0$  ( $a, b, c$  constant)

(Hint: for e), f), g) take out a factor to make the coefficient of the square equal to 1.)

**5.5** The solution of question 5.4g) gave the standard formula for solving quadratic equations. Use it to solve again the quadratic equations in 5.4a) to f).

**5.6** Given the values of the roots, write down a quadratic or cubic equation with those roots (e.g. given 2,3, obtain  $x^2 - 5x + 6 = 0$ ):

- a) 3, 4, b) 2, -1, c)  $\frac{1}{2}$ , -2, d) 1, 2, 3, e) -1, 3, -4

**5.7** Solve the simultaneous equations:

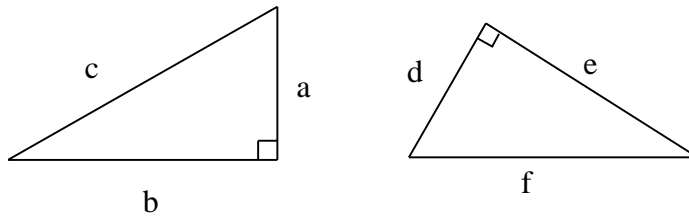
a)  $\begin{cases} 2x - 3y = 4 \\ -x + 2y = 5 \end{cases}$ ,    b)  $\begin{cases} 4x + 3y = 0 \\ 3x - 5y = 2 \end{cases}$ ,    c)  $\begin{cases} 2u + v = 3 \\ \frac{1}{2}u + \frac{3}{2}v = 1 \end{cases}$ ,    \*d)  $\begin{cases} x^2 - y = 0 \\ 2x + y = -1 \end{cases}$

**5.8** For each, find a pair of values (choose small integers) for  $x, y$  that satisfy the equation:

a)  $x - y = 0$ ,    b)  $x + y = 0$ ,    c)  $2x + y = 0$ ,    d)  $3x - 2y = 0$ ,    \*e)  $\frac{1}{2}x + 2y = 0$ ,    f)  $-4x - 3y = 0$

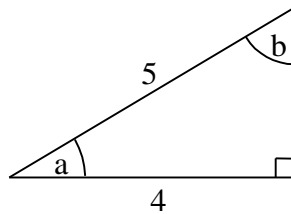
**6. Trigonometry etc.**

**6.1** In each case, given two sides, find the third side (your answer may be left as a square root if you can't calculate it exactly, e.g.  $\sqrt{7}$ ).

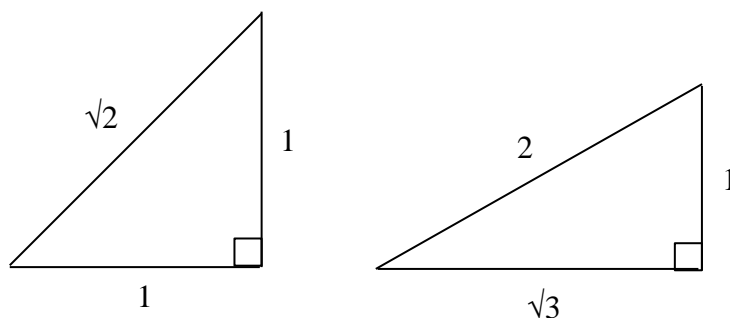


a)  $a = 3, b = 5$ , find  $c$ ,   b)  $a = 4, c = 7$ , find  $b$ ,   c)  $d = 5, e = 12$ , find  $f$ ,   d)  $e = 6, f = 7$ , find  $d$ .

**6.2** For the triangle shown, write down  $\sin a$ ,  $\cos a$ ,  $\tan a$ ,  $\sin b$ ,  $\cos b$ ,  $\tan b$ ,  $\operatorname{cosec} a$ ,  $\operatorname{cosec} b$ ,  $\cot a$ ,  $\cot b$ ,  $\sec a$ ,  $\sec b$



For qu. 6.3 – 6.5, use two simple right-angled triangles as shown, the first with angles  $45^\circ$ ,  $45^\circ$ ,  $90^\circ$ , and the second one (*half* of an equilateral triangle) with angles  $30^\circ$ ,  $60^\circ$ ,  $90^\circ$ .



*Note: see previous page for the 'standard triangles' you should use for qu. 6.3-6.5.*

**6.3** Give the values of  $\sin 30^\circ$ ,  $\sin 45^\circ$ ,  $\sin 60^\circ$ ,  $\cos 0^\circ$ ,  $\tan 45^\circ$ ,  $\cos 30^\circ$ ,  $\sin 90^\circ$ ,  $\sin 0^\circ$ ,  $\cos 90^\circ$  without using a calculator, and find the value of  $(\sin \theta)^2 + (\cos \theta)^2$  for several values of  $\theta$ .

**6.4** Convert between degrees and radians:

a)  $30^\circ$ , b)  $90^\circ$ , \*c)  $45^\circ$ , d)  $150^\circ$ , e)  $270^\circ$ , f)  $315^\circ$ , g)  $\pi/2$ , \*h)  $\pi/4$ , i)  $2\pi/3$ , j)  $5\pi/4$ , \*k)  $9\pi/4$

**6.5** Give values of

$\tan 60^\circ$ ,  $\sin 120^\circ$ ,  $\sin(3\pi/4)$ ,  $\sin 210^\circ$ ,  $\cos(5\pi/6)$ ,  $\tan 225^\circ$ ,  $\cos(3\pi/2)$ ,  $\sin(-30^\circ)$

**6.6** Convert between polar and cartesian coordinates in each case:

- a)  $x = 4, y = 3$ ,   b)  $x = -1, y = 1$ ,   c)  $x = 1, y = -\sqrt{3}$ ,   d)  $r = 3, \theta = 45^\circ$ ,   e)  $r = 2, \theta = 120^\circ$ ,  
f)  $r = 4, \theta = 150^\circ$ ,   \*g)  $r = 2\sqrt{2}, \theta = 135^\circ$


**6.7** Find the equation of a circle from the information provided:

- a) Centre at  $(0,0)$ , radius 3,   b) Centre at  $(2,-3)$ , radius 4.

## 7. Graphs


7.1 Find the equation of the straight line in each case (use variables  $x, y$ ):

- a) through  $(0,0)$  and  $(3,6)$ , b) through  $(-1,3)$  and  $(1,1)$ , c) through  $(-3,-4)$  and  $(-5,-1)$ ,  
d) through  $(2,-3)$  with gradient  $\frac{1}{2}$ , e) through  $(1,3)$ , perpendicular to the line  $y = 1 - 2x$




7.2 Sketch the graphs (all on one diagram) of:

- a)  $y = 2x - 1$ , b)  $2x + 4y - 1 = 0$ , c)  $x = 3$ , d)  $y = -2$ , and give the gradient for case b).




**7.3** Sketch (on one diagram) the graphs of

- a)  $y = x^2 - 1$ , b)  $y = 4 - x^2$ , c)  $y = -\frac{1}{x}$ , d)  $y = 2 - \frac{3}{x}$ , e)  $y^2 = 4x$



**7.4** Sketch the graphs of  $\sin x$ ,  $\cos x$ ,  $\sin 2x$  for values of  $x$  from  $-90^\circ$  to  $360^\circ$ .



**8. Differentiation and simple integration****8.1** Differentiate each expression (note  $a$  is a constant):

a)  $y = x^2 - 1$ , b)  $y = \frac{1}{2}x^3 - 3 + 2ax$ , c)  $z = -\frac{1}{u}$ , d)  $v = \frac{u - 3u^2}{4a}$ , e)  $z = \frac{4}{3u^2} - \frac{\sqrt{u}}{5}$

**8.2** Differentiate each expression ( $a$  is constant): a)  $y = \cos x$ , b)  $v = e^{2u}$ , c)  $f = a \sin 3\theta$ ,  
d)  $s = 2 \ln t - 3e^{-t} - 3a$ , e)  $y = 2a\pi \tan x - \frac{a-1}{x}$ **8.3** Differentiate:



a)  $y = 3x^2 \sin x$ , b)  $z = \frac{2-3w}{1+4w}$ , c)  $s = \cos(t^2)$ , d)  $w = \frac{3m-2\sqrt{m}}{m^3}$

**8.4** Give the indefinite integral of:

a)  $x^3 - 3x + 1$ , b)  $-\cos x + e^{-x} + \frac{3}{x}$ , c)  $4 \sin 2x - \frac{1}{2} \sec^2 x$ , d)  $\frac{t\sqrt{t}-3}{t^2}$

**Answers to Exercises**

Exercises marked (\*) have *no* answers given here. You must check these carefully yourself!

Also note that many answers have *alternative forms*. For example, whether or not you expand brackets, factorise or put fractions over a common denominator is often a matter of choice. So, if your answer is in a slightly different form, but which is equivalent, that's acceptable.

- 1.1 a) 3.142, b) 3.1416, c) 1.41, d) 0.003, e) 100.0, f) \*, g) -34.6, h) \*
- 1.2 a) 0.0033, b) 100.05, c) 100.0, d) 1500, e) 14.5, f) \*, g) 0.0000034000, h) \*
- 1.3 a)  $3.456 \times 10^1$  or  $34.56 \times 10^0$ , b)  $1.0894 \times 10^3$ , c)  $3.027 \times 10^{-1}$  or  $0.3027 \times 10^0$ ,  
d)  $5.52 \times 10^{-4}$  or  $0.552 \times 10^{-3}$ , e)  $-5.63 \times 10^0$ , f) \*, g)  $4 \times 10^{-7}$ , or  $0.4 \times 10^{-6}$ , h) \*
- 1.4 a) 0.0035, b) -207100, c) 0.9930, d) 0.00207, e) 42156, f) \*, g) 1000000, h) \*
- 1.5 a) <, b) >, c) >, d) <, e) >, f) \*, g) >, h) \*
- 1.6 a) 314.16, 0.0031416 or  $3.1416 \times 10^{-3}$ , b) -45300.1, -0.453001, c) 20710, 0.2071,  
d) -0.302, -0.00000302, e)  $3 \times 10^6$ , 30, f) \*, g)  $-3.2 \times 10^{-1}$ ,  $-3.2 \times 10^{-6}$ , h) \*
- 1.7 a) 1/5, b) 1/8, c) -3/4, d) 3/8, e) 0.25, f) \*, g) 0.075, h) \*
- 1.8 a) 4, 8, b) 3, 18, c) 1, 60, d) 2, 24, e) 5, 30, f) \*, g) 1, 60, h) \*
- 1.9 a) -12, b) 35, c) -20, d) 6, e) -5, f) \*, g) 16/5, h) \*
- 2.1 a) 3/2, b) 5/3, c) -4/3, d) 9/7                      2.2 a) 5/6, b) 3/2, c) -1/12, d) \*
- 2.3 a) 1/6, b) 7/2, c) \*, d) 27/8, e) 4, f) 9/8, g) -1/3, h) \*
- 2.4 a)  $\frac{5x+4}{x^2+x-2}$ , b)  $\frac{y-21}{y^2-9}$ , c)  $\frac{9x+10}{2x^2-x-6}$ , d)  $\frac{ay-2y-a}{2y^2-y}$ ,  
e)  $\frac{5u^2+5u-6}{u^3-u^2-2u}$ , f)  $\frac{z^3+6z-4}{2z^2}$ , g)  $\frac{4x^3+5x^2-8x-3}{4x^3+4x}$ , h) \*  
i)  $\frac{3-x}{x^2(x-1)^2}$
- 2.5 a)  $\frac{3x^3}{8}$ , b)  $\frac{3x}{2}$ , c)  $\frac{3y^2z}{10x^2}$ , d)  $\frac{1}{2x}$ , e)  $\frac{a^2+1}{3a(a+1)}$ , f) \*, g)  $\frac{3(b-1)}{2}$ , h) \*
- 2.6 a) 1/8, b) 1, c) \*, d) 4, e) 1/2, f) -2, g) 1/9, h) \*
- 2.7 a)  $10^7$ , b)  $2^2$ , c)  $x^2$ , d)  $x^3$ , e)  $5^4$ , f)  $y^{-3}$ , g)  $8x^3$ , h)  $2x$ , i)  $x^6$ , j) \*, k)  $z^{-3}$ , l) \*, m)  $3x^{-1}$ ,  
n) \*, o)  $2w^{-3}$ , p) \*
- 2.8 a) 2, b) 6, c) -1, d) -3, e) 3, f) \*, g) -3, h) \*
- 2.9 a)  $\log 12$ , b)  $\log 8$ , c)  $\log \frac{1}{2}$ , d)  $\log 2$ , e) 5, f) \*, g) 0, h) \*
- 3.1 a) 100, b) 2500, c) 5400, d)  $2 \times 10^6$ , e)  $5 \times 10^6$ , f) \*, g) 50300, h) \*
- 3.2 a)  $5 \times 10^6 \text{ mm}^2$ , b) 10.8 km/hr, c)  $5 \times 10^6 \text{ N.m}^{-2}$ , d) \*
- 3.3 a) 1200, b) 4 m, c) 1200 m, d) \*                      3.4 200 N.m                      3.5 20 m
- 3.6  $Re = 7 \times 10^4$  (*no* units, or 'dimensionless', which is why it's called Reynold's *number*)
- 3.7 \*

- 4.1 a)  $6x - 8x^2$ , b)  $5 - u$ , c)  $6y - 8$ , d)  $z^2 + z + 2$ , e)  $5u^2 - 2u$ , f) \*
- 4.2 a)  $x^2 + 5x + 4$ , b)  $u^2 + u - 12$ , c)  $y^2 - 9$ , d) \*, e)  $x^2 + xy + 2y - x - 6$ ,  
 f)  $6x^2 + xy - 2y^2 + 5x + 8y - 6$ , g)  $4xy$ , h)  $a^3 + 3a^2b + 3ab^2 + b^3$ , i) \*,  
 j)  $x^2 + 2 + \frac{1}{x^2}$ , k)  $\frac{1}{x^2} - \frac{4}{x^3} + \frac{4}{x^4}$
- 4.3 a)  $3x(2 + y)$ , b)  $2u(4u - 3v)$ , c)  $\frac{1}{4}x^2(2x - 1)$ , d) \*, e)  $3x(x - 4yz + 5z^2)$ ,  
 f)  $\frac{u}{2v} \left( \frac{1}{2v} - \frac{u}{3} \right)$  or  $\frac{u}{12v^2}(3 - 2uv)$ , g)  $\sqrt{x}(1 + \sqrt{x})$ , h)  $2\sqrt{1 - 2x}(2 - 3\sqrt{1 - 2x})$
- 4.4 a)  $(x + 2)(x + 1)$ , b)  $(y - 3)(y - 1)$ , c)  $(v - 5)(v + 3)$ , d) \*, e)  $(2x + 1)(x + 1)$ ,  
 f) \*, g)  $(3z - 2)(2z - 3)$ , h)  $(x + 3)^2$ , i)  $(a + b)(a - b)$ , j)  $(2x + 3y)(2x - 3y)$ ,  
 k)  $(x + \sqrt{3})(x - \sqrt{3})$ , l)  $(u - 2)^2$
- 4.5 a)  $(x - 1)^3$ , b)  $(y + 1)(y - 2)(y - 4)$
- 4.6 a)  $4x^2 - 10x + 4$  or  $2(2x^2 - 5x + 2)$ ,  $\frac{1 - 3y}{y^2}$ , b)  $12x^2 - 16x + 6$ ,  $\frac{y^2 - 2y + 3}{y^2}$ ,  
 c)  $\frac{4x^2 - 4x + 5}{4x - 2}$ ,  $\frac{1 + 4y^2}{2y}$  or  $2y + \frac{1}{2y}$ , d) \*
- 4.7 a)  $(x + 2)^2 + 1$ , b)  $(x - 3)^2 - 1$ , c)  $(x + \frac{3}{2})^2 + \frac{3}{4}$ , d)  $(x - \frac{1}{2})^2 + \frac{3}{4}$ , e) \*
- 5.1 a)  $x = 7/5$ , b)  $y = -5/7$ , c)  $z = -5$ , d)  $u = -1/2$ , e)  $x = -1$ , f) \*
- 5.2 a)  $t = \frac{x + 2}{3}$ , b)  $x = 2 - \frac{3}{y}$ , c)  $L = \frac{gT^2}{4\pi^2}$ , d)  $v = \frac{2 + u}{3 - 2u}$ , e)  $p = \frac{8Q\mu L}{\pi a^4}$ ,  
 f)  $R = \frac{R_1 R_2}{R_1 + R_2}$ , g) \* (use logs)
- 5.3 a)  $(x - 2)(x - 1) = 0$  so  $x = 1$  or  $2$ , b)  $y = 4, -3$ , c) \*, d)  $u = 1, -1/2$ , e)  $v = 1, -2/3$ ,  
 f)  $w = 5/4, -2$ , g)  $x = 0, 4$ , h) \*
- 5.4 a)  $(x + 2)^2 - 1 = 0$ ,  $x + 2 = \pm 1$ ,  $x = -1, -3$ , b)  $y = 0, 2$ , c)  $z = 1, -2$ , d)  $u = 1, 3$ ,  
 e)  $v = -2 \pm \sqrt{5}$ , f)  $w = \frac{-1 \pm \sqrt{3}}{2}$ , g)  $x = \frac{-b \pm \sqrt{b^2 - 4ac}}{2a}$  (after simplifying)
- 5.5 – as for 5.4, but using the formula instead of completing the square
- 5.6 a)  $(x - 3)(x - 4) = 0$ ,  $x^2 - 7x + 12 = 0$ , b)  $x^2 - x - 2 = 0$ , c)  $2x^2 + 3x - 2 = 0$ ,  
 d)  $x^3 - 6x^2 + 11x - 6 = 0$ , e)  $x^3 + 2x^2 - 11x - 12 = 0$
- 5.7 a)  $x = 23$ ,  $y = 14$ , b)  $(6/29, -8/29)$ , c)  $(7/5, 1/5)$ , d) \*
- 5.8 a)  $(1, 1)$  or any with same ratio, b)  $(1, -1)$ , c)  $(1, -2)$ , d)  $(2, 3)$ , e) \*, f)  $(3, -4)$
- 6.1 a)  $c = \sqrt{34}$ , b)  $b = \sqrt{33}$ , c)  $f = 13$ , d)  $\sqrt{13}$
- 6.2  $\sin a = 3/5$ ,  $\cos a = 4/5$ ,  $\tan a = 3/4$ ,  $\sin b = 4/5$ ,  $\operatorname{cosec} a = 5/3$ ,  $\cot b = 3/4$ ,  
 $\sec a = 5/4$

6.3  $\frac{1}{2}, \frac{1}{\sqrt{2}}, \frac{\sqrt{3}}{2}, 1, 1, \frac{\sqrt{3}}{2}, 1, 0, 0$ . Also, note that  $(\sin \theta)^2 + (\cos \theta)^2 = 1$  for *all* values of  $\theta$ .

6.4 a)  $\pi/6$ , b)  $\pi/2$ , c) \*, d)  $5\pi/6$ , e)  $3\pi/2$ , f)  $7\pi/4$ , g)  $90^\circ$ , h) \*, i)  $120^\circ$ , j)  $225^\circ$ , k) \*

6.5  $\sqrt{3}, \frac{\sqrt{3}}{2}, \frac{1}{\sqrt{2}}, -\frac{1}{2}, -\frac{\sqrt{3}}{2}, 1, 0, -\frac{1}{2}$

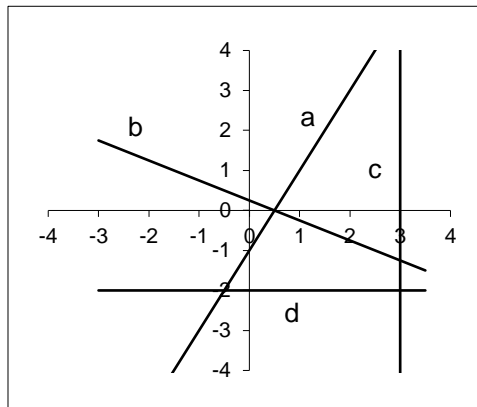
6.6 a)  $r = 5, \theta = \tan^{-1}(\frac{3}{4})$ , b)  $r = \sqrt{2}, \theta = 135^\circ$ , c)  $r = 2, \theta = -60^\circ$ ,

d)  $x = \frac{3}{\sqrt{2}}, y = \frac{3}{\sqrt{2}}$ , e)  $x = -1, y = \sqrt{3}$ , f)  $x = -2\sqrt{3}, y = 2$ , g) \*

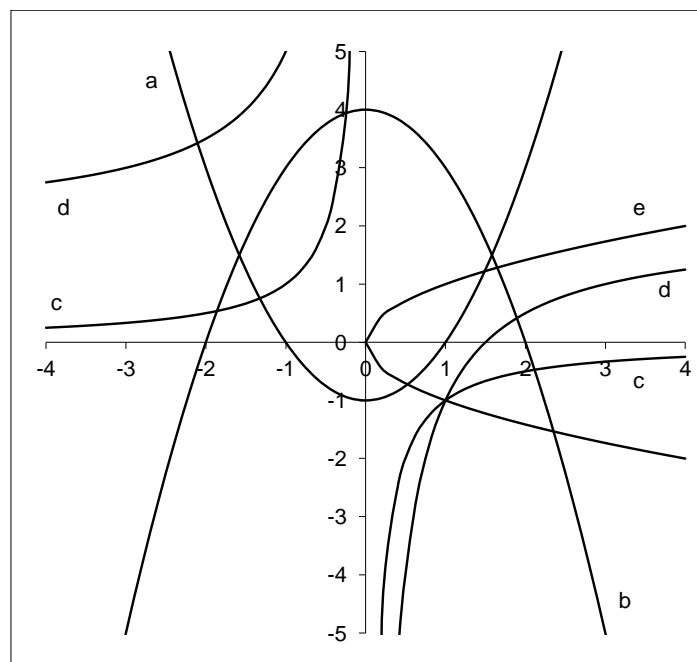
6.7 a)  $x^2 + y^2 = 9$ , b)  $(x-2)^2 + (y+3)^2 = 16$  or  $x^2 + y^2 - 4x + 6y - 3 = 0$

7.1 a)  $y = 2x$ , b)  $y = 2 - x$ , c)  $y = -\frac{3}{2}x - \frac{17}{2}$ , d)  $y = \frac{1}{2}x - 4$ , e)  $y = \frac{1}{2}x + \frac{5}{2}$

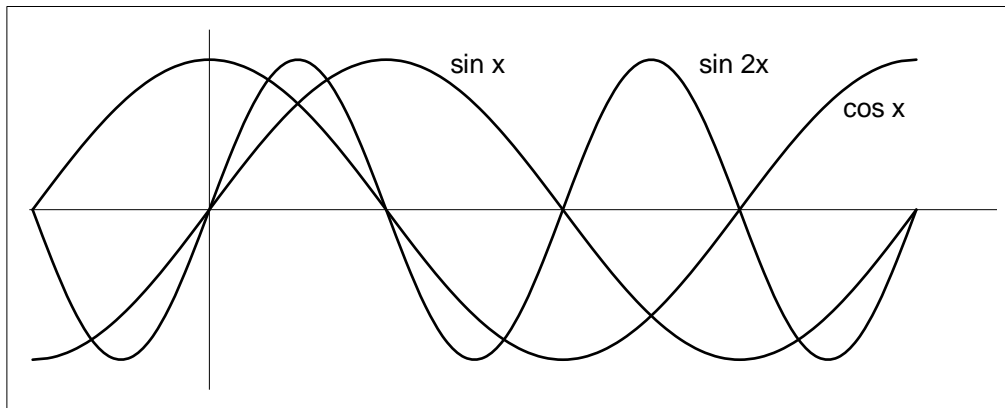
7.2 Case b), gradient is - 0.5



7.3



7.4



- 8.1 a)  $\frac{dy}{dx} = 2x$ , b)  $\frac{dy}{dx} = \frac{3}{2}x^2 + 2a$ , c)  $\frac{dz}{du} = \frac{1}{u^2}$ , d)  $\frac{dv}{du} = \frac{1-6u}{4a}$ ,  
 e)  $\frac{dz}{du} = -\frac{8}{3u^3} - \frac{1}{10\sqrt{u}}$
- 8.2 a)  $\frac{dy}{dx} = -\sin x$ , b)  $\frac{dv}{du} = 2e^{2u}$ , c)  $\frac{df}{d\theta} = 3a \cos 3\theta$ , d)  $\frac{ds}{dt} = \frac{2}{t} + 3e^{-t}$ ,  
 e)  $\frac{dy}{dx} = 2a\pi \sec^2 x + \frac{a-1}{x^2}$
- 8.3 a)  $\frac{dy}{dx} = 6x \sin x + 3x^2 \cos x$ , b)  $\frac{dz}{dw} = \frac{-11}{(1+4w)^2}$ , c)  $\frac{ds}{dt} = -2t \sin(t^2)$ ,  
 d)  $\frac{dw}{dm} = -\frac{6}{m^3} + \frac{5}{m^{7/2}} = -\frac{6}{m^3} + \frac{5}{m^3 \sqrt{m}}$
- 8.4 a)  $\frac{1}{4}x^4 - \frac{3}{2}x^2 + x + C$ , b)  $-\sin x - e^{-x} + 3 \ln x + C$ , c)  $-2 \cos 2x - \frac{1}{2} \tan x + C$ ,  
 d)  $2\sqrt{t} + \frac{3}{t} + C$  (NB The constant  $C$  is an essential part of the answer!)